

CANNUCCE


+ =



Quante sono le cannuccie non legate (le unità) in entrambi i riquadri iniziali?

Con le cannuccie non legate (le unità) riusciamo a formare altri fascetti da 10? Quanti?

Rappresenta nel riquadro sotto i fascetti legati e le cannuccie che rimangono fuori



Quante cannuccie rimangono fuori?

Quanti sono i fascetti da 10 cannuccie (le decine) nel riquadro?

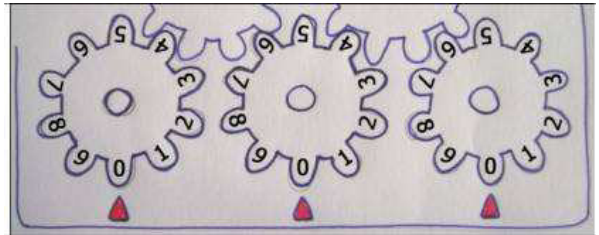
Più quelli formati dalle unità?

Allora, + =

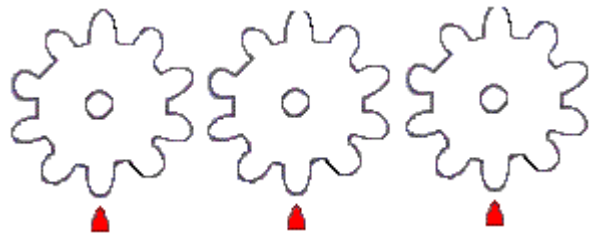
PASCALINA

.... =

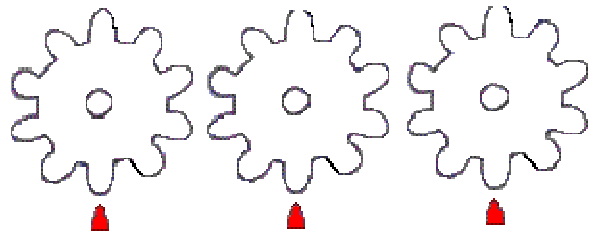
1) AZZERA LA PASCALINA



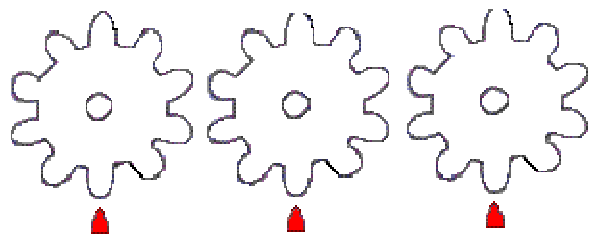
2) INSERISCI IL PRIMO NUMERO



3)
.....
.....

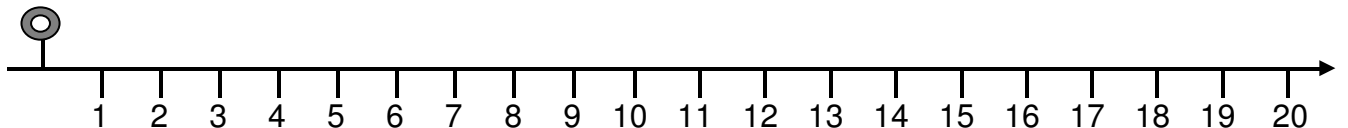
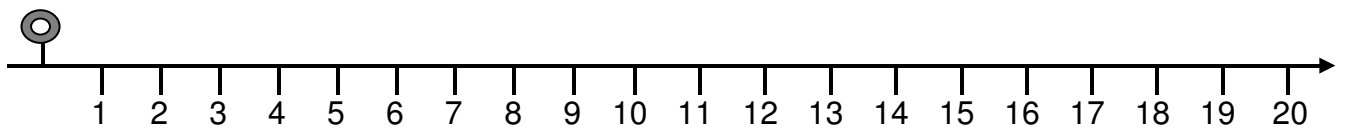
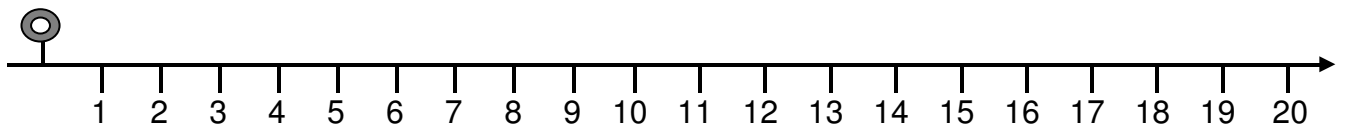
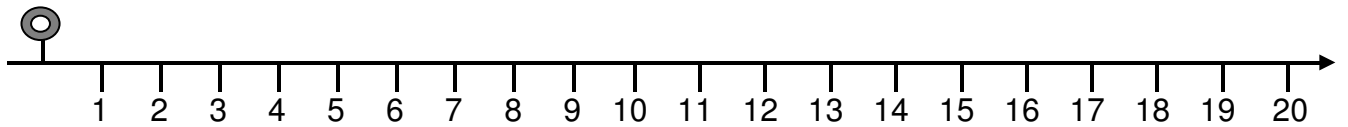
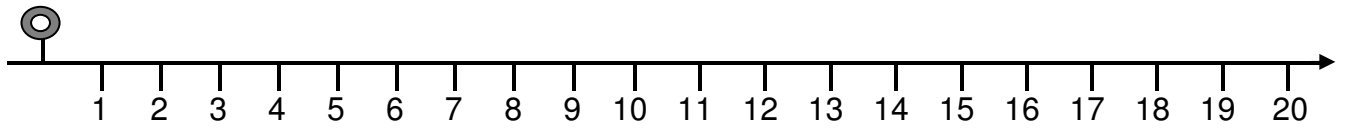


4)
.....
.....



LINEA DEI NUMERI

+ 



LINEA DEI NUMERI

